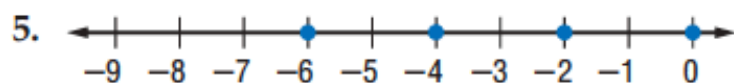
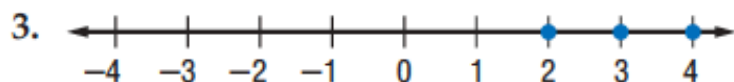
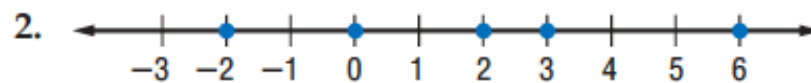


Extra Practice

Lesson 2-1

(pages 68–72)

Name the coordinates of the points graphed on each number line. **1–6. See margin.**



Graph each set of numbers. **7–10. See margin.**

7. $\{-2, -4, -6\}$

8. $\{\dots, -3, -2, -1, 0\}$

9. $\{\text{integers greater than } -1\}$

10. $\{\text{integers less than } -5 \text{ and greater than } -10\}$

Find each absolute value.

11. $|22|$ **22**

12. $|-2.5|$ **2.5**

13. $\left|\frac{2}{3}\right|$ **$\frac{2}{3}$**

14. $\left|-\frac{7}{8}\right|$ **$\frac{7}{8}$**

Lesson 2-1

1. $\{-3, -2, -1, 0, 1, 2, 3, 4\}$

2. $\{-2, 0, 2, 3, 6\}$

3. $\{2, 3, 4\}$

4. $\{7, 8, 9, 10, 11, 12, 13\}$

5. $\{-6, -4, -2, 0\}$

6. $\{-2, -1, 0, 1, 2, 3, 4\}$

